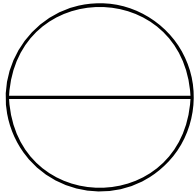


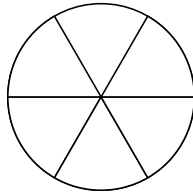
Name: _____

Fractions

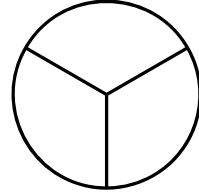
- Using the diagrams provided, colour in the sections to show the fraction clue provided.
- When finished write out the fraction in words.



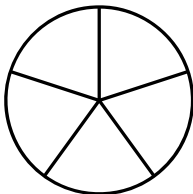
$$\frac{1}{2}$$



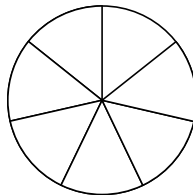
$$\frac{1}{6}$$




$$\frac{1}{3}$$



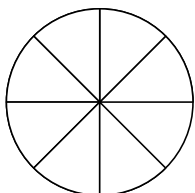
$$\frac{2}{5}$$



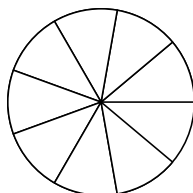
$$\frac{4}{7}$$



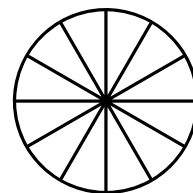
$$\frac{3}{4}$$



$$\frac{3}{8}$$



$$\frac{4}{9}$$

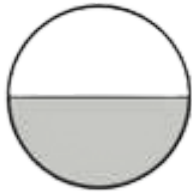


$$\frac{9}{12}$$

Answer key

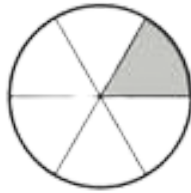
Fractions

- Using the diagrams provided, colour in the sections to show the fraction clue provided.
- When finished write out the fraction in words.



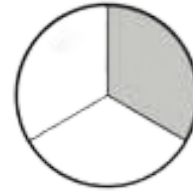
$$\frac{1}{2}$$

one half



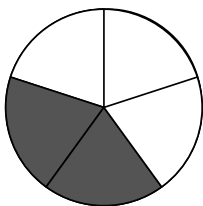
$$\frac{1}{6}$$

one sixth



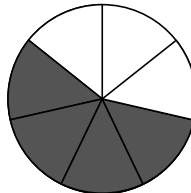
$$\frac{1}{3}$$

one third



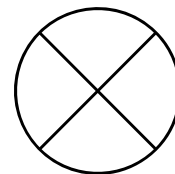
$$\frac{2}{5}$$

two fifths



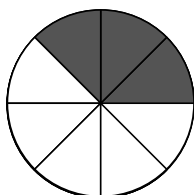
$$\frac{4}{7}$$

four sevenths



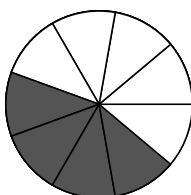
$$\frac{3}{4}$$

three fourths



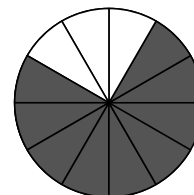
$$\frac{3}{8}$$

three eighths



$$\frac{4}{9}$$

four ninths



$$\frac{9}{12}$$

nine twelfths