

DATE:.....



NAME:.....



Let's Count

Direction:

- Count and write the number




Answer key 

Let's Count

Direction:


- Count and write the number




15



11



17



13
