



Name: _____

Date: _____

2 Two



Directions: Circle all number 2s below.

2 7 8 0 1 2 3
2 2 6 2 7 6 2
8 1 2 3 5 3 9





There are two cars.

2 2 2 2
2 2 2 2

Answer key

2 Two



Directions: Circle all number 2s below.

2 7 8 0 1 2 3
2 2 6 2 7 6 2
8 1 2 3 5 3 9



There are two cars.

2 2 2 2
2 2 2 2