

Name: _____


Date: _____

Equal Groups

Multiplication Strategy


Groups with an equal number of items in each group.

Example:



3 groups of 4
 $3 \times 4 = 12$

Write a multiplication problem to match the model:



Draw a model to match the multiplication problem and figure out the answer:


$8 \times 7 =$

Equal Groups

Multiplication Strategy


Groups with an equal number of items in each group.

Example:




3 groups of 4
 $3 \times 4 = 12$

Write a multiplication problem to match the model:



6 groups of 5
 $6 \times 5 = 30$

Draw a model to match the multiplication problem and figure out the answer:



8 groups of 7
 $8 \times 7 = 56$