

Name: _____

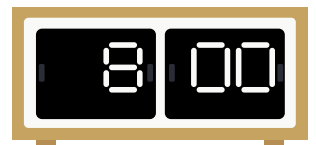

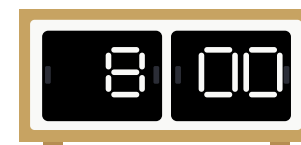
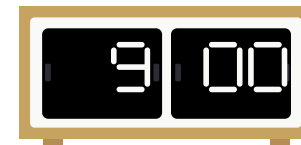
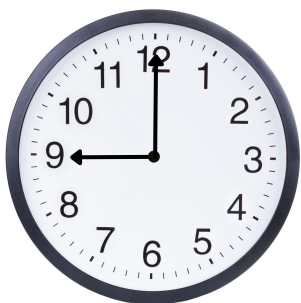


Date: _____

Reading a Clock: Digital and Analog

Direction:

Which digital clock shows the same time as the analog clock?

Circle the correct answer.



Answer key

Reading a Clock: Digital and Analog

Direction:

Which digital clock shows the same time as the analog clock?

Circle the correct answer.

