

Name: _____

Date: _____



Subtracting Money Amounts

How Much Change?



Direction: Subtract the followings.



You have



You buy



What's Left

1



65¢




2



55¢




3



15¢



4



10¢



5



70¢



Answer key

Subtracting Money Amounts



How Much Change?



Direction: Subtract the followings.



You have



You buy



What's Left

1



65 ¢

35 ¢


2



55 ¢

45 ¢


3



15 ¢

85 ¢

4



10 ¢

90 ¢

5



70 ¢

30 ¢