



Name: \_\_\_\_\_

Date: \_\_\_\_\_

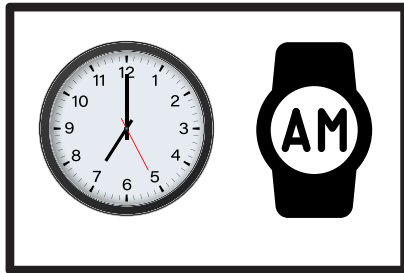
# Comparing and Ordering Time

Directions:

Compare and order the given time cards. Cut and paste them in order.



# Comparing and Ordering Time



It's ten o'clock  
in the morning.

It's quarter  
past three at  
afternoon.




It's 12.00 p.m.

# Answer key

## Comparing and Ordering Time

Directions:

Compare and order the given time cards. Cut and paste them in order.



It's ten o'clock  
in the morning.



It's 12.00 p.m.



It's quater  
past three at  
afternoon.

