



Name: _____ Date: _____

Egg-cellent Addition


Count the eggs, write the number of each and find the sum.



$$\underline{\quad} + \underline{\quad} = \underline{\quad}$$



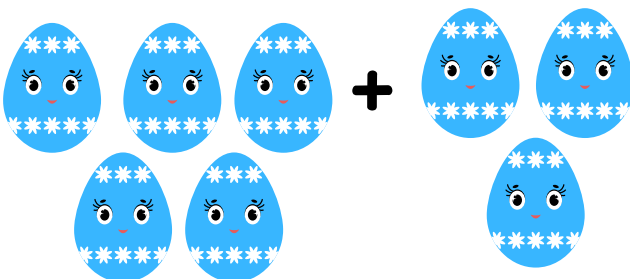
$$\underline{\quad} + \underline{\quad} = \underline{\quad}$$




$$\underline{\quad} + \underline{\quad} = \underline{\quad}$$



$$\underline{\quad} + \underline{\quad} = \underline{\quad}$$



$$\underline{\quad} + \underline{\quad} = \underline{\quad}$$




$$\underline{\quad} + \underline{\quad} = \underline{\quad}$$


Answer key

Egg-cellent Addition


Count the eggs, write the number of each and find the sum.



$$\underline{4} + \underline{2} = \underline{6}$$



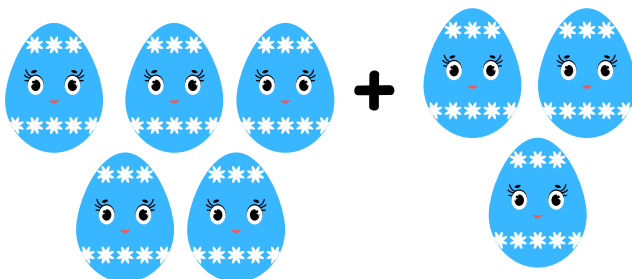
$$\underline{3} + \underline{1} = \underline{4}$$




$$\underline{6} + \underline{3} = \underline{9}$$



$$\underline{2} + \underline{2} = \underline{4}$$



$$\underline{5} + \underline{3} = \underline{8}$$



$$\underline{4} + \underline{3} = \underline{7}$$