


Name: _____

Date: _____

Subtraction Watermelons



Solve the subtraction by crossing out the numbers to be subtracted. Write the answers on the line.



$5 - 3 = \underline{\quad}$



$3 - 2 = \underline{\quad}$



$4 - 2 = \underline{\quad}$




$3 - 1 = \underline{\quad}$



$2 - 2 = \underline{\quad}$




$6 - 4 = \underline{\quad}$



Answer key

Subtraction Watermelons



Solve the subtraction by crossing out the numbers to be subtracted. Write the answers on the line.



$$5 - 3 = \underline{2}$$



$$3 - 2 = \underline{1}$$



$$4 - 2 = \underline{2}$$



$$3 - 1 = \underline{2}$$



$$2 - 2 = \underline{0}$$



$$6 - 4 = \underline{2}$$

