

Name: \_\_\_\_\_







Date: \_\_\_\_\_

# Time Conversion (Minutes and Hours)



Direction:

Match the time given in minutes with time in hours.

- |   |                          |
|---|--------------------------|
|  150 minutes   | ● 3 hours                |
|  600 minutes   | ● 5 hours                |
|  180 minutes | ● 2 hours and 30 minutes |
|  280 minutes | ● 10 hours               |
|  300 minutes | ● 1 hours and 15 minutes |
|  75 minutes  | ● 4 hour and 40 minutes  |

# Answer key

## Time Conversion (Minutes and Hours)



Direction:

Match the time given in minutes with time in hours.

